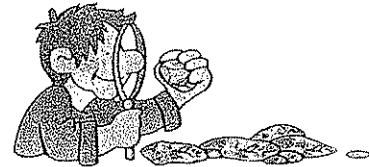


Geography Form 1



Time : 1 hour

N.B Write everything on the paper provided, and the use of good English is recommended.

Name: _____ Class: _____

A. Fill in the blanks

(5marks)

- 1. This is the name of the biggest and deepest ocean.
2. This is the name of the ocean found next to Africa.
3. This is the name of the ocean that touches with the Mediterranean sea
4. This is the name of the biggest continent.
5. Only scientists live in this continent due to its very cold climate

B. State if the sentence is true or false

(10 marks)

- 1. Africa is the second largest continent.
2. Africa touches with Europe.
3. The Atlantic ocean is the smallest ocean.
4. A continent is a large landmass.
5. A land locked country is a country surrounded by other countries.
6. Italy is a peninsula.
7. An peninsula is a country surrounded completely with water.
8. Antarctica is found in the Northern Hemisphere.
9. The Mediterranean is a small ocean.
10. Latin American countries are found in the north of America.

C. Figure 1 below is showing a world map.

The letters are indicating the Continents while the numbers are indicating the Oceans. Label them by choosing from the words given below.

North America	South America	Europe	Africa	Asia	Australia
Arctic	Atlantic	Pacific	Indian	Antarctic	

(11marks)

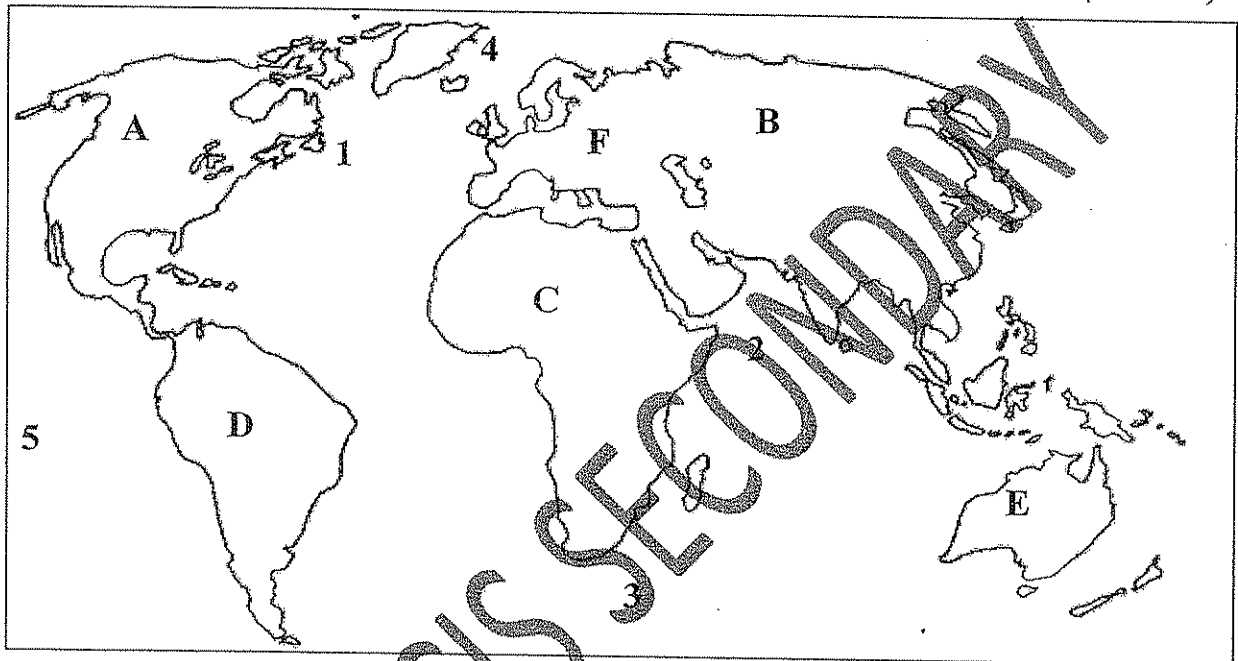


Figure 1

- A = _____ B = _____
 C = _____ D = _____
 E = _____ F = _____
 1 = _____ 2 = _____
 3 = _____ 4 = _____
 5 = _____

D. Answer the following questions

(16marks)

1. Name 4 main countries in Europe. _____,
_____, _____, _____.
2. Name 3 islands in the Mediterranean apart from the Maltese archipelago.
_____, _____, _____.
3. Name 2 big countries in South America. _____, _____.
4. Name 2 big countries in North America. _____, _____.
5. Name 2 African countries which touches the Mediterranean sea.
_____, _____.
6. Name the island located South of Australia. _____.
7. Name the 2 largest countries in Asia. _____, _____.

E. State if the sentence is True or False

(10 marks)

1. The solar system is a system of 9 planets and their moon. _____
2. The solar system is part of a small galaxy. _____
3. Our solar system is called milky bar. _____
4. Every planet in the solar system is travelling around the moon. _____
5. Earth's orbit takes 365 1/4 days to go round the sun. _____
6. The universe was formed by an explosion called the Big Bun _____
7. Planet Earth was formed 4.6 billion years ago. _____
8. The study of the stars is called astronomy. _____
9. The planet nearest to the sun is called Mercury. _____
10. Mars and Snickers are 2 planets found in our solar system. _____

F. Figure 2 below is representing Earth. In the spaces provided, label the diagram with the 5 important lines of latitudes by choosing from the words given below, and then answer the following questions.

(5 marks)



Arctic Circle	Antarctic Circle	Equator	Tropic of Cancer	Tropic of Capricorn
---------------	------------------	---------	------------------	---------------------

Figure 2


Briefly answer the following questions.

(4 marks)

1. The prime line of latitude is called what? _____
2. Why places on the Equator are very hot? _____
3. Latitudes help us understand what? _____
4. Name a country that is found on the Equator? _____

G. Continue the following puzzle

(5marks)



Across

3. This part of earth's interior is semi-liquid and is important because it contains many different resources like iron and gold.

5. These are rocks formed by volcanic eruptions.

Down

1. These are rocks which are formed by sediment and fossils.

2. The inner is the Earth's layer which contains magnetism and explains gravity.

4. Earth is made up of different layers, which are the inner core, outer core mantle and

H. Complete the following table

(10 marks)

<u>Name in English</u>	<u>Name in Maltese</u>	<u>Uses of the rock</u>
Upper Coralline Limestone		
	Zonqor	
		Used for building proposes .
Blue Clay		
		Breaks into sand because it is very fragile.

I Answer the following questions

(5 marks)

1. Which of the five rock layers is the oldest?
2. Which of the five rock layers is the youngest?
3. Which types of rocks are impermeable?
4. What does the word impermeable mean?
5. Give the name of a permeable rock.

End of Paper

ST. FRANCIS SECONDARY