


Geography Form 2



Time : 1 hour

Name: _____	Class: _____
-------------	--------------

A. State whether these statements are True or False ( 10 marks )

1. Fishing is the major source of income for many countries bordering the Mediterranean \_\_\_\_\_
2. The Mediterranean Sea is the smallest of the semi enclosed European seas. \_\_\_\_\_
3. The Mediterranean Sea is surrounded by 19 countries. \_\_\_\_\_
4. The Mediterranean has shores on 4 continents. \_\_\_\_\_
5. The Mediterranean has a combined population of around 139 million people. \_\_\_\_\_
6. The Mediterranean consists of 2 major basins. \_\_\_\_\_
7. There are 4 main religions in the Mediterranean region. \_\_\_\_\_
8. The Mediterranean climate is characterised by hot dry summers, cold , dry winters. \_\_\_\_\_
9. Olives, potatoes, grapes and apples are typical crops of the Mediterranean region. \_\_\_\_\_
10. The 3 oldest cultures within the Mediterranean are the: Greeks, Romans and Arabs. \_\_\_\_\_

ST. FRANCIS SECONDARY

B. Figure 1 below is a map of the Mediterranean. Label the countries according to the letters given and give its capital cities.

Spain is given as an example.

( 14 marks )

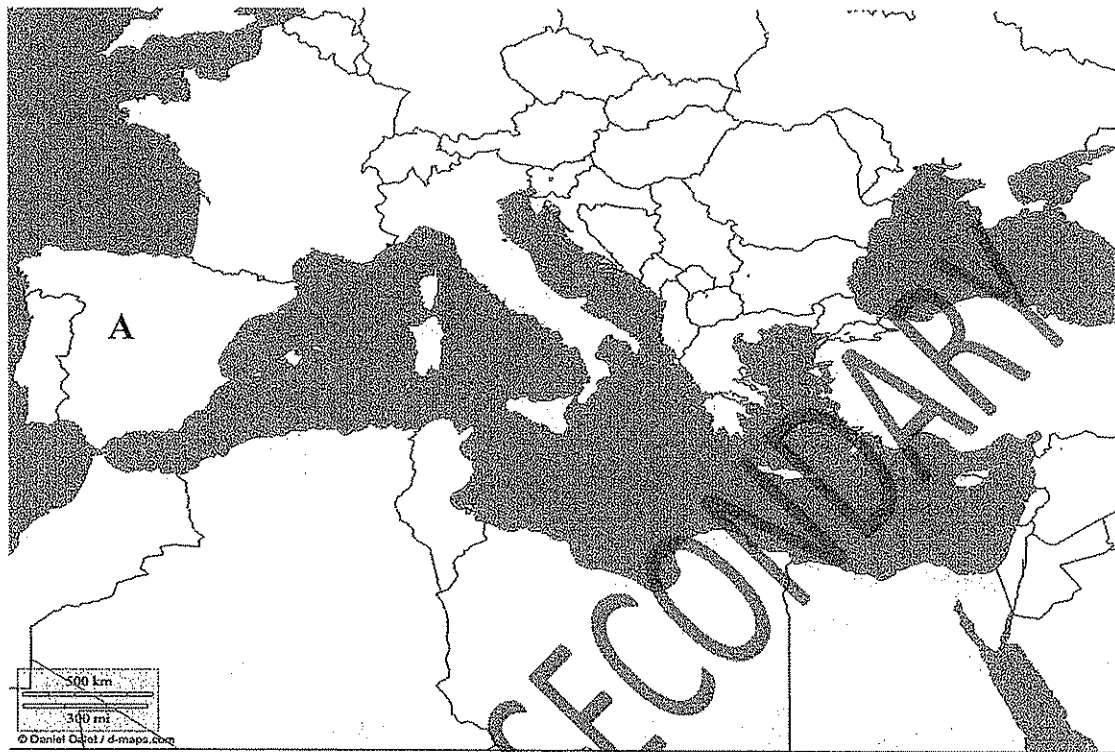


Figure 1

Letter to mark on map	Name of country	It's capital city
A	Spain	Madrid
B	Portugal	
C	Turkey	
D	Tunisia	
E	Greece	
F	Croatia	
G	Algeria	
H	France	

C. The Mediterranean Sea contain a number of islands. Name the given Islands.

( 4 marks )



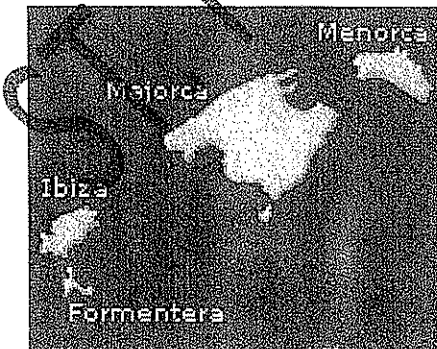
\_\_\_\_\_



\_\_\_\_\_



\_\_\_\_\_



\_\_\_\_\_

FRANCIS SECONDARY

**D. Answer the following questions.**

1. The Mediterranean region is continuously being supplied with water. From where does this water come from?

\_\_\_\_\_  
\_\_\_\_\_  
( 2 marks )

2. Freshwater supplies are also present in aquifers, that is when rain water collects in the pore spaces of permeable rocks. Unfortunately this fresh water is sometimes being misused. Explain 2 factors of how this water is being misused.

\_\_\_\_\_  
\_\_\_\_\_  
\_\_\_\_\_  
( 2 marks )

3. Due to the increase in demand of fresh water, countries like Malta are building desalination plants, where sea water is turned into potable water. Name 2 places in Malta where one can find these desalination ( Reverse Osmosis) plants.

\_\_\_\_\_  
( 2 marks )

4. There are 4 rivers that supply the Mediterranean with water. Name 2.

\_\_\_\_\_  
( 2 marks )

ST. FRANCIS SECONDARY

**E. Briefly answer the following questions.**

1. What do the initials E.U stand for. \_\_\_\_\_ ( 1 mark )

2. Why was the E.U founded?  
 \_\_\_\_\_ ( 3 marks )

3. Does Malta form part of the E.U? \_\_\_\_\_ ( 1 mark )

4. What a country must have to join the E.U?  
 \_\_\_\_\_  
 \_\_\_\_\_ ( 4 marks )

5. Name 2 positive factors that one might benefit from when joining the E.U.  
 \_\_\_\_\_  
 \_\_\_\_\_ ( 4 marks )

6. Name 2 negative factors of being a member of the E.U.  
 \_\_\_\_\_  
 \_\_\_\_\_ ( 4 marks )

**F. Put the given words under the correct heading. ( 8 marks )**

*Important for climate / are equal / runs from north to south / are important for time calculations / runs from east to west / are not equal / Prime line is the Equator / Prime line is Greenwich*

<u>Datitudes</u>	<u>Longitudes</u>
1.	1.
2.	2.
3.	3.
4.	4.

G. State if the sentence is True or False ( 5 marks )

1. The 180 degrees line of Longitude is the International Date line. \_\_\_\_\_
2. Across the International Date Line, the date and time changes. \_\_\_\_\_
3. For every 15 degrees, time will vary by 2 hours. \_\_\_\_\_
4. On the East, time decreases by 1 hour. \_\_\_\_\_
5. Malta is 1 hour ahead of England. \_\_\_\_\_

H. Fill in with the correct word by choosing from the ones given below.

rotation	Earth's tilt	1 day	revolution	365 1/4
Winter	two	23 1/2 degrees	4	seasons

( 5 marks )

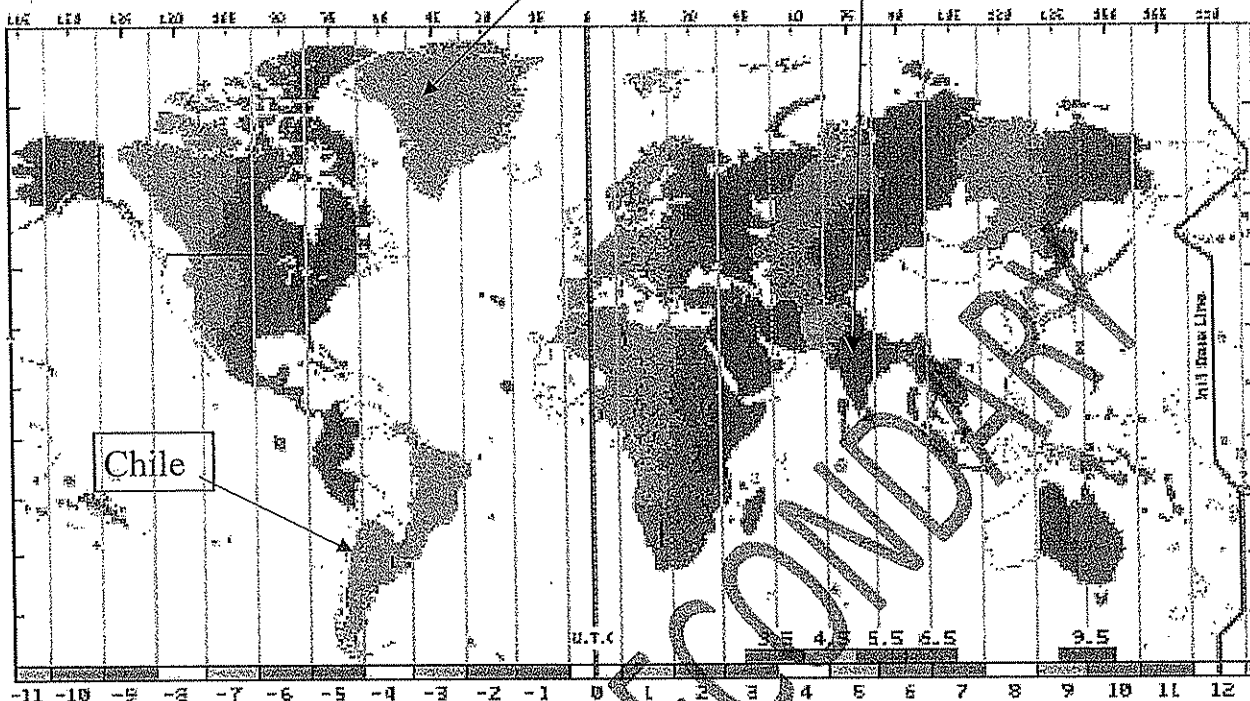
1. Earth has \_\_\_\_\_ movements, which are rotation and \_\_\_\_\_.
2. \_\_\_\_\_ gives us day and night while revolution gives us \_\_\_\_\_.
3. We have the seasons, due to \_\_\_\_\_.
4. To understand seasons, there are \_\_\_\_\_ important days.
5. The Earth is tilted on its own axis by \_\_\_\_\_.
6. Earth goes round the Sun in an orbit of \_\_\_\_\_ days.
7. If in the Northern Hemisphere we are experiencing Summer, in the Southern Hemisphere they will be experiencing \_\_\_\_\_.
8. For Earth to wobble once on its own axis, it takes \_\_\_\_\_.

I. Answer the following questions

Greenland

India

(3marks)



- i. If in Malta it is 10am, what time will it be in India? \_\_\_\_\_
- ii. If in Malta it is 9 am, what time will it be in Chile? \_\_\_\_\_
- iii. If in Malta it is 9 am, what time will it be in Greenland? \_\_\_\_\_

J. Answer the following questions.

- i. What is the International Date Line?

\_\_\_\_\_  
( 1 mark )

II. What do the initials G.M.T stands for?

\_\_\_\_\_ ( 1mark )

- iii. Malta lies in the CET. What does this mean?

\_\_\_\_\_  
( 2marks )

