

Geography Form 1



Time : 1 hour

N.B Write everything on the paper provided, and the use of good English is recommended.

Name: _____	Class: _____
--------------------	---------------------

A. Study about the Continents and Oceans

1. Fill in the blanks (5marks)

- i. This is the name of the biggest and deepest ocean. _____
- ii. This is the name of the ocean found next to Africa. _____
- iii. This is the name of the ocean that touches with the Mediterranean sea _____
- iv. This is the name of the biggest continent. _____
- v. Only scientists live in this continent due to its very cold climate _____

2. State if the sentence is true or false (10 marks)

- i. Africa is the second largest continent. _____
- ii. Africa touches with Europe. _____
- iii. The Atlantic ocean is the smallest ocean. _____
- iv. A continent is a large landmass. _____
- v. A land locked country is a country surrounded by other countries. _____
- vi. Italy is a peninsula. _____
- vii. An peninsula is a country surrounded completely with water. _____
- viii. Antarctica is found in the Northern Hemisphere. _____
- viiii. The Mediterranean is a small ocean. _____
- X. Latin American countries are found in the north of America. _____

3. Figure 1 below is showing a world map.

The letters are indicating the Continents while the numbers are indicating the Oceans. Label them by choosing from the words given below.

(11marks)

North America	South America	Europe	Africa	Asia	Australia
Arctic	Atlantic	Pacific	Indian	Antarctic	

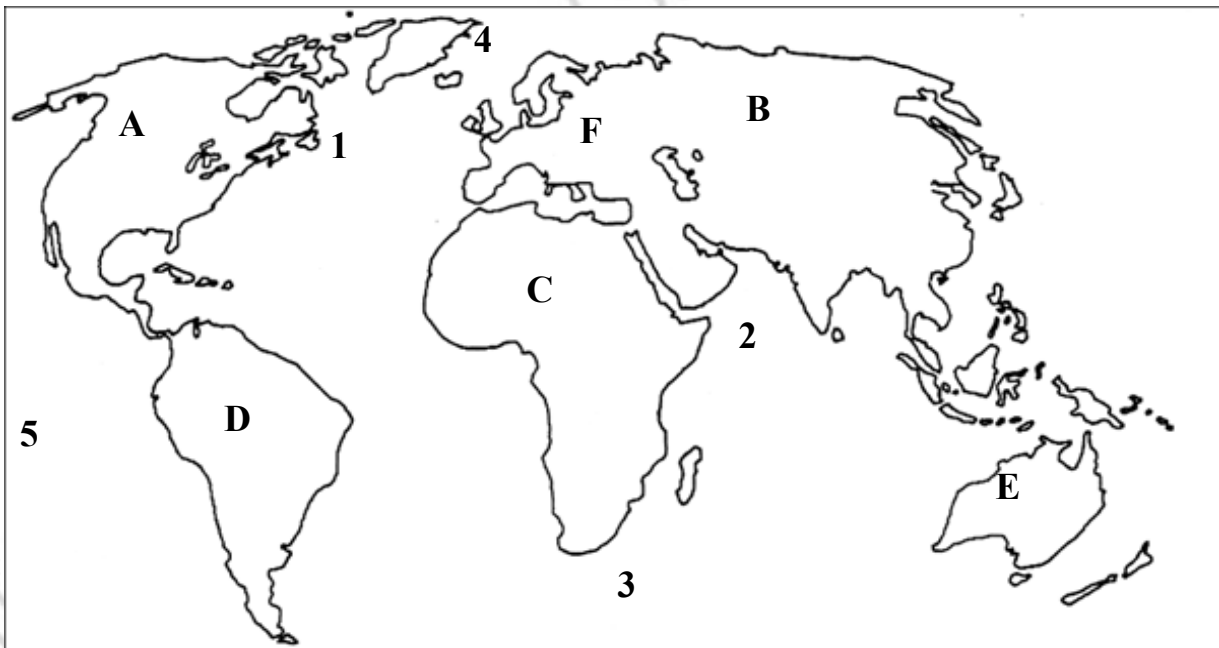


Figure 1
World map

A = _____ B = _____

C = _____ D = _____

E = _____ F = _____

1 = _____ 2 = _____

3 = _____ 4 = _____

5 = _____

4. Answer the following questions (16marks)




- i. Name 4 main countries in Europe. _____,
_____, _____, _____.
- ii. Name 3 islands in the Mediterranean apart from the Maltese archipelago.
_____, _____, _____.
- iii. Name 2 big countries in South America. _____, _____.
- iv. Name 2 big countries in North America. _____, _____.
- v. Name 2 African countries which touches the Mediterranean sea.
_____, _____.
- vi. Name the island located South of Australia. _____.
- vii. Name the 2 largest countries in Asia. _____, _____.

B. Map work skills

1. Look carefully at Figure 1 'Plan of Year 6 Classroom' and then underline the correct word from the brackets. (10 marks)

- i. There are (16, 20, 21) pupils' desks in this classroom.
- ii. There are (6, 4, 5) computers in this classroom.
- iii. There are (8, 9, 10) girls in this class.
- iv. There are (8, 9, 10) boys in this class.
- v. Claude is sitting at the (back, side, front) of the class.
- vi. The teacher's desk is in front of (Claude and Kyra, Luke and Clare, Rebecca and Matthew).
- vii. The classroom door leads to (another classroom, head's office, corridor).
- viii. The computer desk touches the (south, west, north) wall of the Year 6 classroom.
- viii. The cupboard is found in the (north west, north east, south east) corner of the room.
- x. The room that lies to the east of Year 6 classroom is (Year 4, Year 5, the office).

2. Draw a plan for the following objects. (9marks)

	<p>Table</p>	
	<p>Hat</p>	
	<p>Bucket</p>	


3. True or False? Tick (X) in the appropriate box. (9marks)

		True	False
i	Geography makes use of plans and maps.		
ii	A plan shows us the shape of an object as seen from above.		
iii	The drawings found on the pages of the atlas are maps.		
iv	Seen from above, Malta has the shape of a horse.		
v	Maps have keys, which are used to open the map.		
vi	Scale on maps represents real life distance.		
vii	Grid References help us find places and objects on maps.		
viii	The compass always shows us where the North is.		
viii	The study and making of maps is called Cartography.		

C. The study of Earth's interior and Rocks

1. Continue the following puzzle

(5marks)



Across

3. This part of earth's interior is semi-liquid and is important because it contains many different resources like iron and gold.

5. These are rocks formed by volcanic eruptions.

Down

1. These are rocks which are formed by sediment and fossils.

2. The inner is the Earth's layer which contains magnetism and explains gravity.

4. Earth is made up of different layers, which are the inner core, outer core mantle and

2. Complete the following table

(10 marks)

<u>Name in English</u>	<u>Name in Maltese</u>	<u>Uses of the rock</u>
Upper Coralline Limestone		
	Zonqor	
		Used for building proposes .
Blue Clay		
		Breaks into sand because it is very fragile.

3. Answer the following questions

(5 marks)

- i. Which of the five rock layers is the oldest?
- ii. Which of the five rock layers is the youngest?
- iii. Which types of rocks are impermeable?
- iv. What does the word impermeable mean?
- v. Give the name of a permeable rock.

D. Choose one of the following topics and write approximately 80 words about it. (9 marks)

1. A continent you have visited. (write about language, cultures, people, important building etc)

OR

2. Earth`s formation (you can write how earth formed, how it was when it formed, how water came along etc.)

Or

3. Rocks of Malta (you can write the names in English and Maltese, which are impermeable etc).

ST FRANCIS' SECONDARY SPECIMEN PAPER

End of Paper

SECONDARY SPECIMEN PAPER